

分数测试 (Fraction Test)

1. 请问图中短线段是长线段的几分之几?

What fraction is the smaller stick out of the longer stick?



2. 如图所示的这块蛋糕和你那块蛋糕的 $\frac{2}{5}$ 一样大, 请画出你的那块蛋糕。

The piece of pie shown below is $\frac{2}{5}$ as big as your piece of pie. Draw your piece of pie.



3. 如图所示的线段长度和另一条线段的 5 倍一样长, 请画出另一条线段。

The stick shown below is 5 times as long as another stick. Draw the other stick.



4. 下图所示是一块巧克力糖。请找出它的 $\frac{5}{6}$ 。

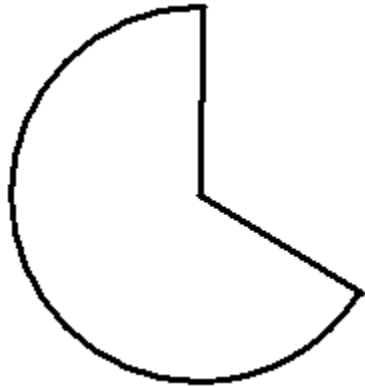
Make $\frac{5}{6}$ of the candy bar shown below.



5. 下图所示的线段长度和另一条线的 3 倍一样长，请画出另一条线段。
The stick shown below is 3 times as long as another stick. Draw the other stick.



6. 下图所示的这块匹萨饼和你那块匹萨饼的 6 倍一样大，请画出你的那块匹萨饼。
The amount of pizza shown below is 6 times as big as your slice. Draw your slice.



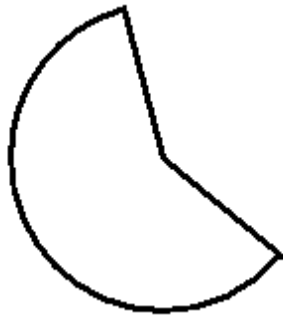
7. 请找出下图巧克力糖的 $\frac{1}{9}$ 。
Make $\frac{1}{9}$ of the candy bar shown below.




8. 如图所示的这块匹萨饼跟你的那块匹萨饼的 3 倍一样大，请画出你的那块匹萨饼。
The amount of pizza shown below is 3 times as big as your slice. Draw your slice.



9. 什么分数可以表示下图这块匹萨饼和整个匹萨饼的关系？
What fraction is the piece of pie shown below out of a whole pie?

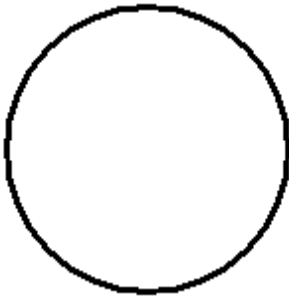


10. 下图所示为两块巧克力糖。请问小块的是大块的几分之几。
What fraction is the smaller bar out of the larger bar?



11. 如图是一块蛋糕。你的那块和这块的 $\frac{1}{5}$ 一样大，请画出你的那块。

Your piece of pie is $\frac{1}{5}$ as big as the piece shown below. Draw your piece of pie.



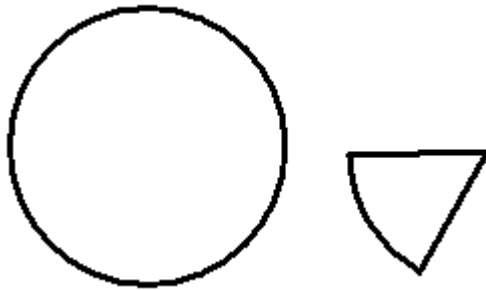
12. 如果你的线段跟下图线段的 $\frac{3}{5}$ 一样长，请画出你的线段。

Your stick is $\frac{3}{5}$ as long as the stick shown below. Draw your stick.



13. 请问图中小块蛋糕是整个蛋糕的几分之几？

What fraction is the smaller pie piece out of the whole pie?



14. 如图所示的巧克力和整条巧克力的 $\frac{4}{5}$ 一样长。请画出整条巧克力。

The stick shown below is $\frac{4}{5}$ as long as a whole candy bar. Draw the whole candy bar.




15. 如图所示，请问短线段是长线段的几分之几？

What fraction is the smaller stick out of the longer stick?



16. 请找出下图巧克力糖的 $\frac{5}{8}$ 。

Make $\frac{5}{8}$ of the candy bar shown below.



17. 请找出如图所示巧克力糖的 $\frac{1}{7}$ 。

Make $\frac{1}{7}$ of the candy bar shown below.



18. 如图所示的巧克力和整条巧克力的 $\frac{3}{7}$ 一样长，请你画出整条巧克力。

The stick shown below is $\frac{3}{7}$ as long as a whole candy bar. Draw the whole candy bar.



19. 你的线段与下图线段的 $\frac{1}{7}$ 一样长。画出你的线段。

Your stick is $\frac{1}{7}$ as long as the stick shown below. Draw your stick.




20. 你的那块匹萨饼与如图所示的这块匹萨饼的 $\frac{4}{5}$ 一样大，请画出你的那块匹萨饼。

Your piece of pie is $\frac{4}{5}$ as big as the piece shown below. Draw your piece of pie.



21. 下图所示为两块巧克力糖。请问小块的是大块的几分之几。
What fraction is the smaller bar out of the larger bar?



22. 如图所示的这块蛋糕和你的那块蛋糕的 $\frac{5}{6}$ 一样大，请你画出你的那块蛋糕。
The piece of pie shown below is $\frac{5}{6}$ as big as your piece of pie. Draw your piece of pie.

